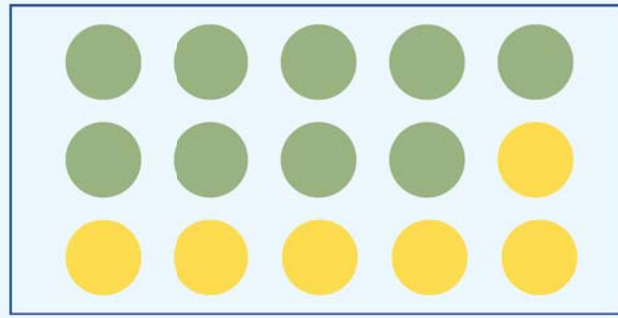


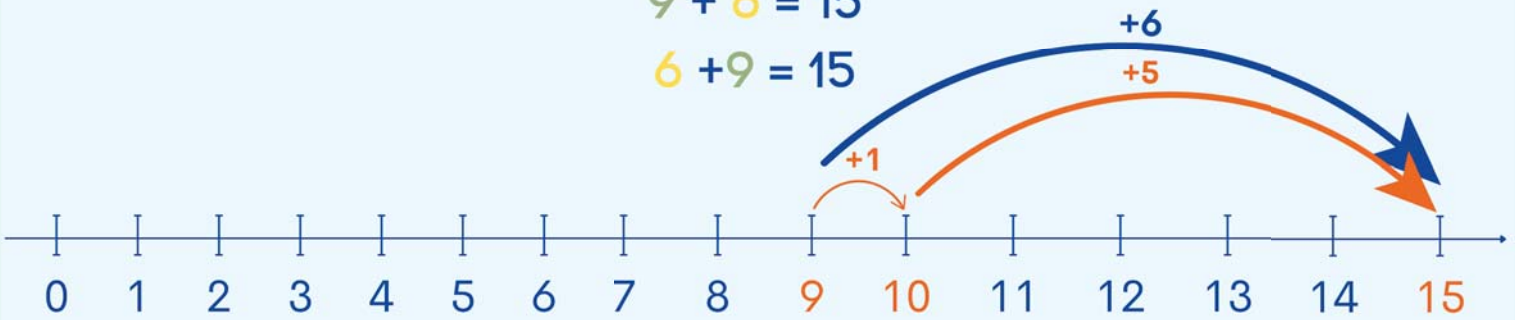
חבור עד 15

לומדים




$$9 + 6 = 15$$

$$6 + 9 = 15$$



מתרגלים


1 עבור כל ציור, כתבו שני תרגילי חבור שונים, לפי הדגמה.



ב

$$\square + \square = \square$$


$$\square + \square = \square$$



א

$$8 + 7 = 15$$


$$7 + 8 = 15$$



ד

$$\square + \square = \square$$

$$\square + \square = \square$$



ג

$$\square + \square = \square$$

$$\square + \square = \square$$

2 חשבו את הסכום (אפשר להעזר בציר המספרים).

$6 + 5 = \square$

$4 + 9 = \square$

$6 + 9 = \square$

$12 + 3 = \square$

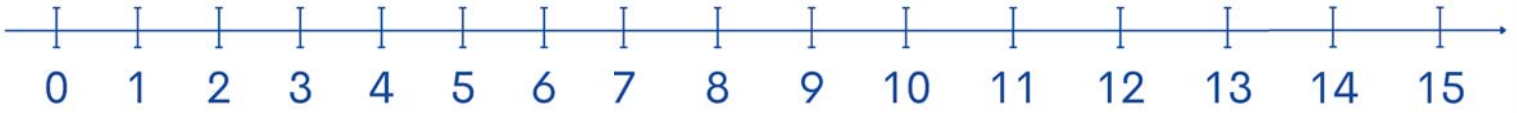
$10 + 4 = \square$

$4 + 8 = \square$


$3 + 7 = \square$

$7 + 8 = \square$

$4 + 11 = \square$

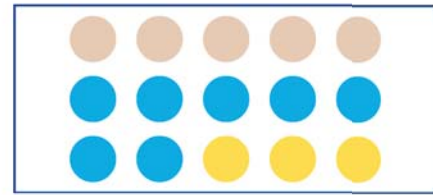


3 השלימו לפי הציור.




ב

$\square + \square + \square = \square$




א

$5 + 7 + 3 = 15$



ד

$\square + \square + \square = \square$



ג

$\square + \square + \square = \square$

4 חֲשְׁבוּ בְּשֵׁתֵי צוּרוֹת שׁוֹנוֹת כַּמָּה בְּלוֹנִים יֵשׁ בְּסֶךְ הַכֹּל.



$$\square + \square + \square = \square$$



$$\square + \square + \square = \square \quad \text{או:}$$



זוֹכְרִים

$$9 + 6 = 15$$

$$6 + 9 = 15$$

$$7 + 8 = 15$$

$$8 + 7 = 15$$