

# חבור עד 14

## לומדים



לֶדָן 8 בָּלוֹנִים.  
 לְטִלְיָה 6 בָּלוֹנִים.  
 כַּמָּה בָּלוֹנִים יֵשׁ לָהֶם בְּסָךְ הַכֹּל?

הַחֲשׁוּב:  $8+6=14$   
 הַתְּשׁוּבָה: יֵשׁ לָהֶם בְּסָךְ הַכֹּל 14 בָּלוֹנִים

## מתרגלים

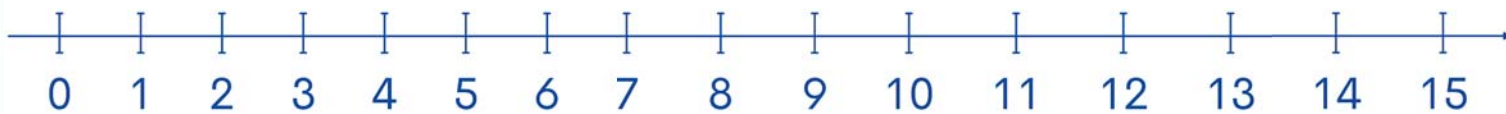
1 כַּמָּה בָּלוֹנִים יֵשׁ לִילְדִים בְּסָךְ הַכֹּל?





הַחֲשׁוּב: \_\_\_\_\_

הַתְּשׁוּבָה: \_\_\_\_\_

2 כמה גלות יש בסך הכל? (אפשר להעזר בציר המספרים)





א



+  =

ב




+  =

ג

+  =

3 פתרו לפי הדגמה.



$$\boxed{8} + \boxed{5} = \boxed{13}$$

$$\boxed{5} + \boxed{8} = \boxed{13}$$



א

$$\boxed{\phantom{0}} + \boxed{\phantom{0}} = \boxed{\phantom{0}}$$

$$\boxed{\phantom{0}} + \boxed{\phantom{0}} = \boxed{\phantom{0}}$$

ב

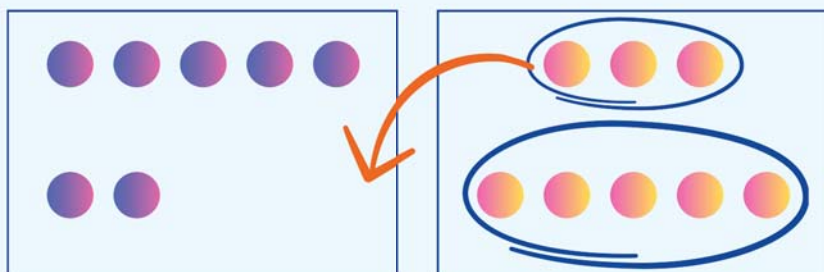
$$\boxed{\phantom{0}} + \boxed{\phantom{0}} = \boxed{\phantom{0}}$$

$$\boxed{\phantom{0}} + \boxed{\phantom{0}} = \boxed{\phantom{0}}$$

ג

לומדים

דרך פשוטה לחשוב היא להשלים בשלב ראשון ל-10, ואחר כך להוסיף את השאר.




$$7+8=?$$

$$7+3=10$$

$$10+5=15$$

$$7+8=15$$

4 פתרו בדרך הנוחה לכם.






---



---

$$\square + \square = \square$$




---



---

$$\square + \square = \square$$