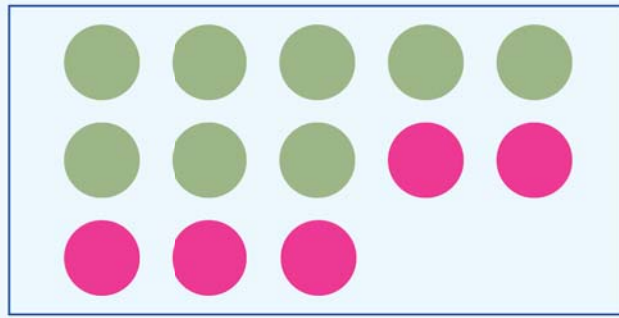


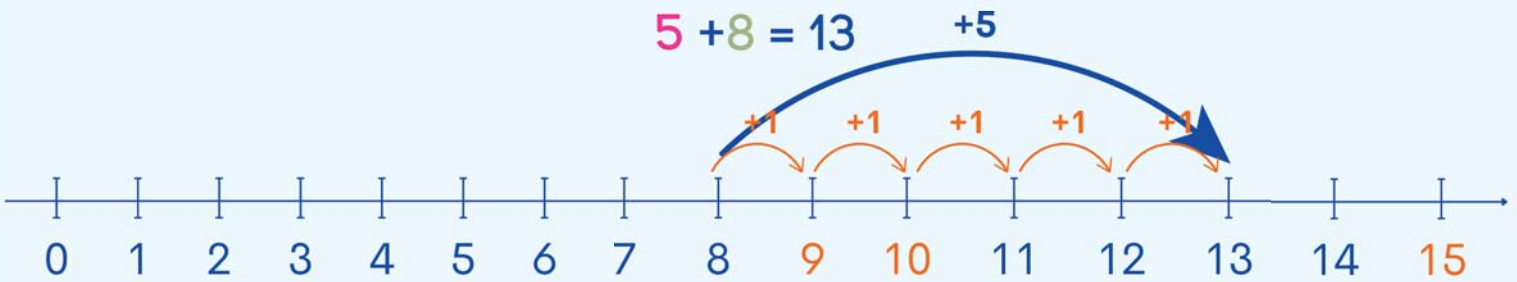
חבור עד 13

לומדים




$$8 + 5 = 13$$

$$5 + 8 = 13$$



מתרגלים

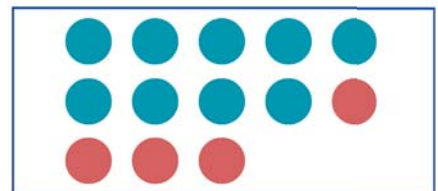
1 עבור כל ציור, כתבו שני תרגילי חבור שונים.



ב

$$\square + \square = \square$$


$$\square + \square = \square$$



א

$$\square + \square = \square$$


$$\square + \square = \square$$



ד

$$\square + \square = \square$$

$$\square + \square = \square$$



ג

$$\square + \square = \square$$

$$\square + \square = \square$$

2 חשבו את הסכומים (אפשר להעזר בציר המספרים).

$7 + 4 = \square$

$9 + 3 = \square$

$9 + 4 = \square$

$10 + 3 = \square$

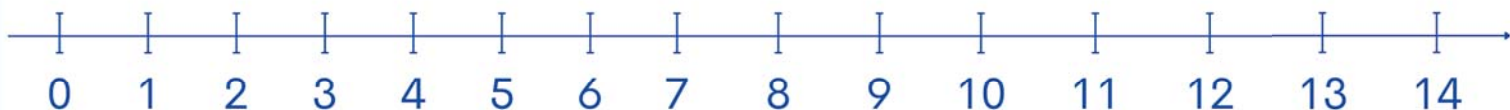
$7 + 6 = \square$

$5 + 6 = \square$


$12 + 1 = \square$

$0 + 13 = \square$

$4 + 9 = \square$

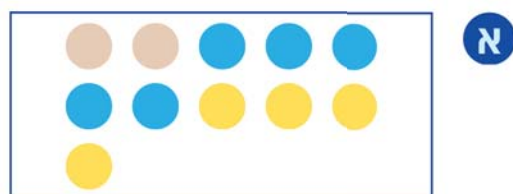


3 השלימו בהתאם לציור, לפי הדגמה.




ב

$\square + \square + \square = \square$



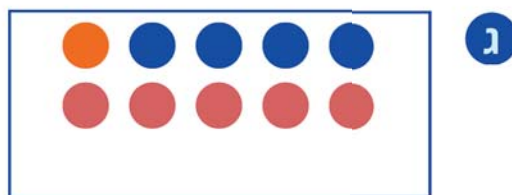
ג

$2 + 5 + 4 = 11$



ד

$\square + \square + \square = \square$



ה

$\square + \square + \square = \square$

זכרים

$9 + 4 = 13$

$4 + 9 = 13$

$8 + 5 = 13$

$5 + 8 = 13$

$7 + 6 = 13$

$6 + 7 = 13$