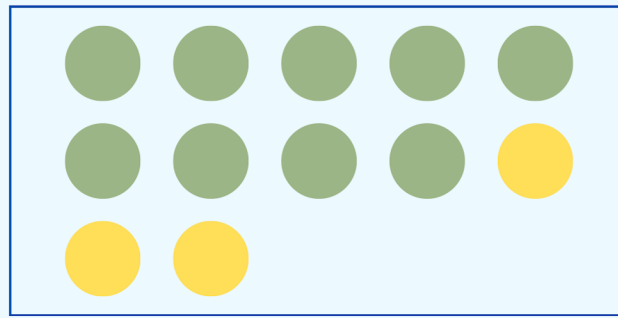


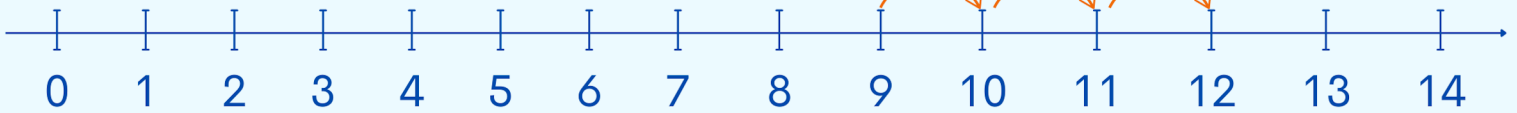
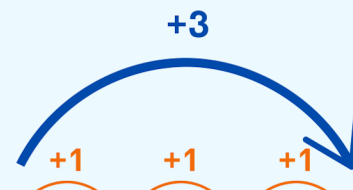
חבור עד 12

לומדים




$$9 + 3 = 12$$

$$3 + 9 = 12$$




מתרגלים

1 עבור כל ציור, כתבו שני תרגילי חבור שונים.




$$\boxed{7} + \boxed{3} = \boxed{10}$$

$$\boxed{3} + \boxed{7} = \boxed{10}$$




$$\square + \square = \square$$

$$\square + \square = \square$$



$$\square + \square = \square$$

$$\square + \square = \square$$



$$\square + \square = \square$$

$$\square + \square = \square$$

2 חשבו את הסכום (אפשר להעזר בציר המספרים).

$6 + 4 = \square$

$2 + 10 = \square$

$10 + 2 = \square$

$5 + 6 = \square$

$3 + 9 = \square$

$4 + 7 = \square$

$11 + 1 = \square$

$2 + 8 = \square$

$4 + 8 = \square$



3 השלימו בהתאם לציור, לפי הדגמה.

ב

$7 + 3 + 2 = 12$

א

$\square + \square + \square = \square$

ד

$\square + \square + \square = \square$

ג

$\square + \square + \square = \square$

$9 + 3 = 12$

$3 + 9 = 12$

$8 + 4 = 12$

$4 + 8 = 12$

$7 + 5 = 12$

$5 + 7 = 12$

$6 + 6 = 12$

זכרים