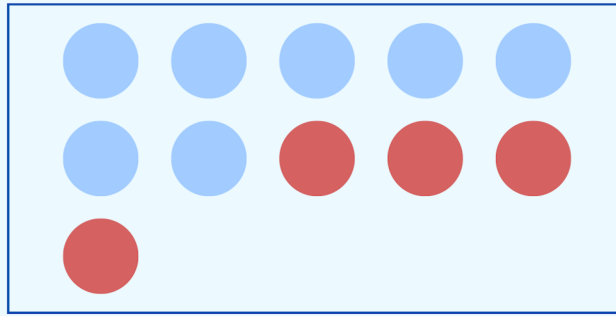


חבור עד 11

לומדים




$$7 + 4 = 11$$

$$4 + 7 = 11$$


מתרגלים

1 עבור כל ציור, כתבו שני תרגילי חבור שונים.




$$\boxed{4} + \boxed{6} = \boxed{10}$$

$$\boxed{6} + \boxed{4} = \boxed{10}$$




$$\square + \square = \square$$

$$\square + \square = \square$$



$$\square + \square = \square$$

$$\square + \square = \square$$



$$\square + \square = \square$$

$$\square + \square = \square$$

2 חשבו את הסכום.

$5 + 5 = 10$

$4 + 6 = \square$

$10 + 1 = \square$

$7 + 4 = \square$

$3 + 7 = \square$


$2 + 9 = \square$

$5 + 6 = \square$

$3 + 8 = \square$

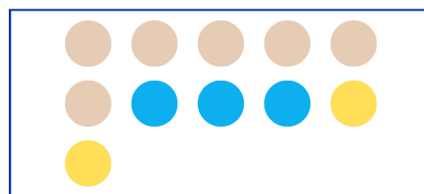
$1 + 8 = \square$

3 השלימו בהתאם לציור, לפי הדגמה.




ב

$4 + 1 + 5 = 10$




א

$\square + \square + \square = \square$



ד

$\square + \square + \square = \square$



ג

$\square + \square + \square = \square$

זכרים

$9 + 2 = 11$

$2 + 9 = 11$

$8 + 3 = 11$

$3 + 8 = 11$

$7 + 4 = 11$

$4 + 7 = 11$

$6 + 5 = 11$

$5 + 6 = 11$